


Knowing Nets

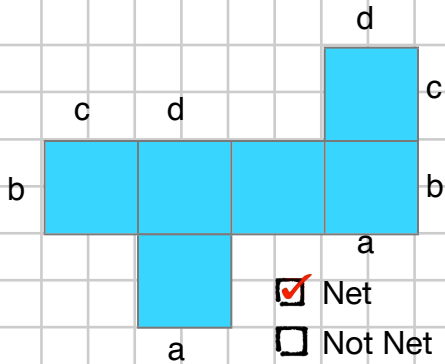
Instructions

Emile has a job as a box designer. He is looking at possible nets for a new cube-shaped box. Some of these nets will form a cube and some will not. Identify which of the following nets will make a cube.

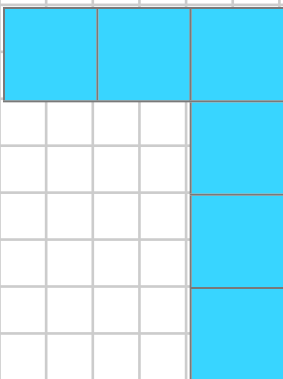
For those that will not work, explain why not. For those that will, try to label all corresponding edges.



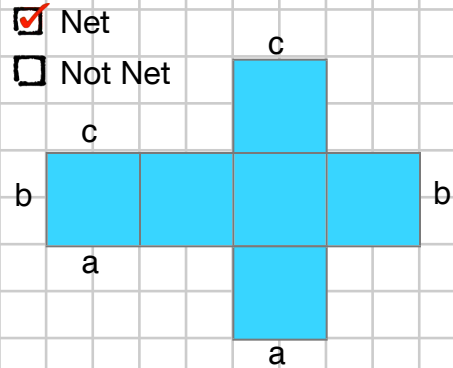
- Net
- Not Net



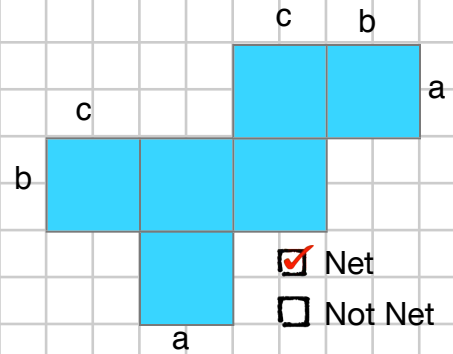
- Net
- Not Net



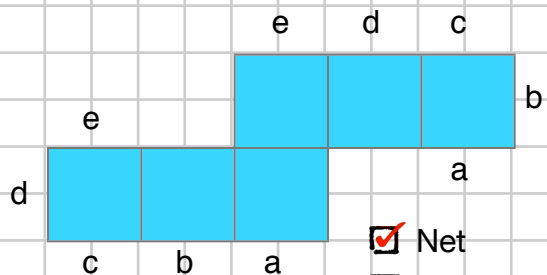
- Net
- Not Net



- Net
- Not Net



- Net
- Not Net



- Net
- Not Net